

© International Baccalaureate Organization 2021

All rights reserved. No part of this product may be reproduced in any form or by any electronic or mechanical means, including information storage and retrieval systems, without the prior written permission from the IB. Additionally, the license tied with this product prohibits use of any selected files or extracts from this product. Use by third parties, including but not limited to publishers, private teachers, tutoring or study services, preparatory schools, vendors operating curriculum mapping services or teacher resource digital platforms and app developers, whether fee-covered or not, is prohibited and is a criminal offense.

More information on how to request written permission in the form of a license can be obtained from <https://ibo.org/become-an-ib-school/ib-publishing/licensing/applying-for-a-license/>.

© Organisation du Baccalauréat International 2021

Tous droits réservés. Aucune partie de ce produit ne peut être reproduite sous quelque forme ni par quelque moyen que ce soit, électronique ou mécanique, y compris des systèmes de stockage et de récupération d'informations, sans l'autorisation écrite préalable de l'IB. De plus, la licence associée à ce produit interdit toute utilisation de tout fichier ou extrait sélectionné dans ce produit. L'utilisation par des tiers, y compris, sans toutefois s'y limiter, des éditeurs, des professeurs particuliers, des services de tutorat ou d'aide aux études, des établissements de préparation à l'enseignement supérieur, des fournisseurs de services de planification des programmes d'études, des gestionnaires de plateformes pédagogiques en ligne, et des développeurs d'applications, moyennant paiement ou non, est interdite et constitue une infraction pénale.

Pour plus d'informations sur la procédure à suivre pour obtenir une autorisation écrite sous la forme d'une licence, rendez-vous à l'adresse <https://ibo.org/become-an-ib-school/ib-publishing/licensing/applying-for-a-license/>.

© Organización del Bachillerato Internacional, 2021

Todos los derechos reservados. No se podrá reproducir ninguna parte de este producto de ninguna forma ni por ningún medio electrónico o mecánico, incluidos los sistemas de almacenamiento y recuperación de información, sin la previa autorización por escrito del IB. Además, la licencia vinculada a este producto prohíbe el uso de todo archivo o fragmento seleccionado de este producto. El uso por parte de terceros —lo que incluye, a título enunciativo, editoriales, profesores particulares, servicios de apoyo académico o ayuda para el estudio, colegios preparatorios, desarrolladores de aplicaciones y entidades que presten servicios de planificación curricular u ofrezcan recursos para docentes mediante plataformas digitales—, ya sea incluido en tasas o no, está prohibido y constituye un delito.

En este enlace encontrará más información sobre cómo solicitar una autorización por escrito en forma de licencia: <https://ibo.org/become-an-ib-school/ib-publishing/licensing/applying-for-a-license/>.

**Physics**  
**Higher level**  
**Paper 2**

Monday 3 May 2021 (afternoon)

Candidate session number

2 hours 15 minutes

--	--	--	--	--	--	--	--	--	--

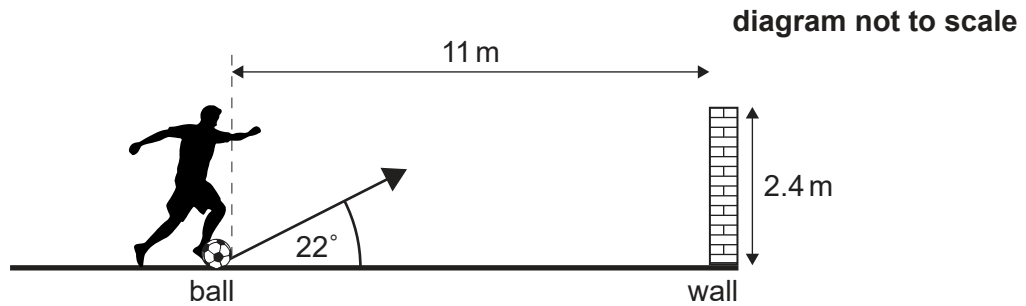
**Instructions to candidates**

- Write your session number in the boxes above.
- Do not open this examination paper until instructed to do so.
- Answer all questions.
- Answers must be written within the answer boxes provided.
- A calculator is required for this paper.
- A clean copy of the **physics data booklet** is required for this paper.
- The maximum mark for this examination paper is **[90 marks]**.



Answer **all** questions. Answers must be written within the answer boxes provided.

1. A football player kicks a stationary ball of mass 0.45 kg towards a wall. The initial speed of the ball after the kick is  $19 \text{ m s}^{-1}$  and the ball does not rotate. Air resistance is negligible and there is no wind.



- (a) The player's foot is in contact with the ball for 55 ms. Calculate the average force that acts on the ball due to the football player. [2]

.....

.....

.....

.....

- (b) (i) The ball leaves the ground at an angle of  $22^\circ$ . The horizontal distance from the initial position of the edge of the ball to the wall is 11 m. Calculate the time taken for the ball to reach the wall. [2]

.....

.....

.....

.....

**(This question continues on the following page)**



**(Question 1 continued)**

(ii) The top of the wall is 2.4 m above the ground. Deduce whether the ball will hit the wall. [3]

.....

.....

.....

.....

.....

.....

(c) In practice, air resistance affects the ball. Outline the effect that air resistance has on the vertical acceleration of the ball. Take the direction of the acceleration due to gravity to be positive. [2]

.....

.....

.....

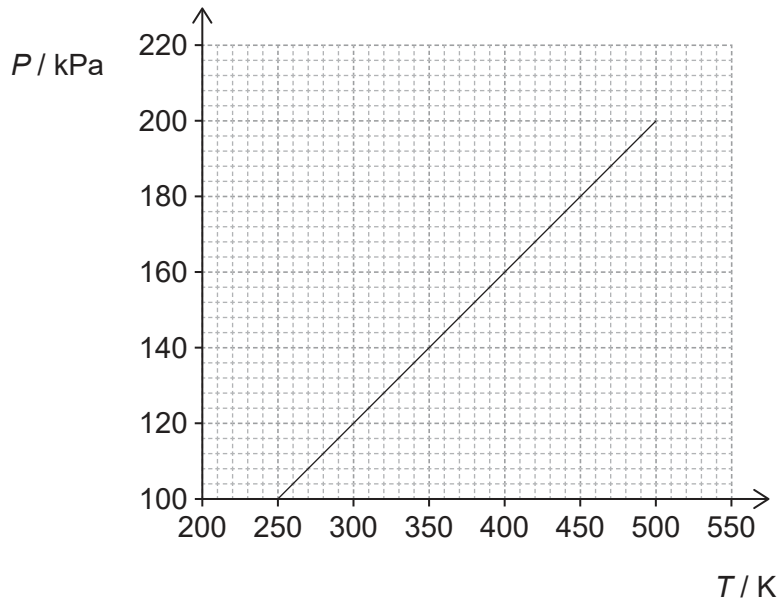
.....



28EP03

Turn over

2. The graph shows the variation with temperature  $T$  of the pressure  $P$  of a fixed mass of helium gas trapped in a container with a fixed volume of  $1.0 \times 10^{-3} \text{ m}^3$ .



- (a) Deduce whether helium behaves as an ideal gas over the temperature range 250 K to 500 K. [2]

.....

.....

.....

.....

- (b) Helium has a molar mass of 4.0 g. Calculate the mass of gas in the container. [2]

.....

.....

.....

.....

(This question continues on the following page)



**(Question 2 continued)**

- (c) A second container, of the same volume as the original container, contains twice as many helium atoms. The graph of the variation of  $P$  with  $T$  is determined for the gas in the second container.

Predict how the graph for the second container will differ from the graph for the first container.

[2]

.....

.....

.....

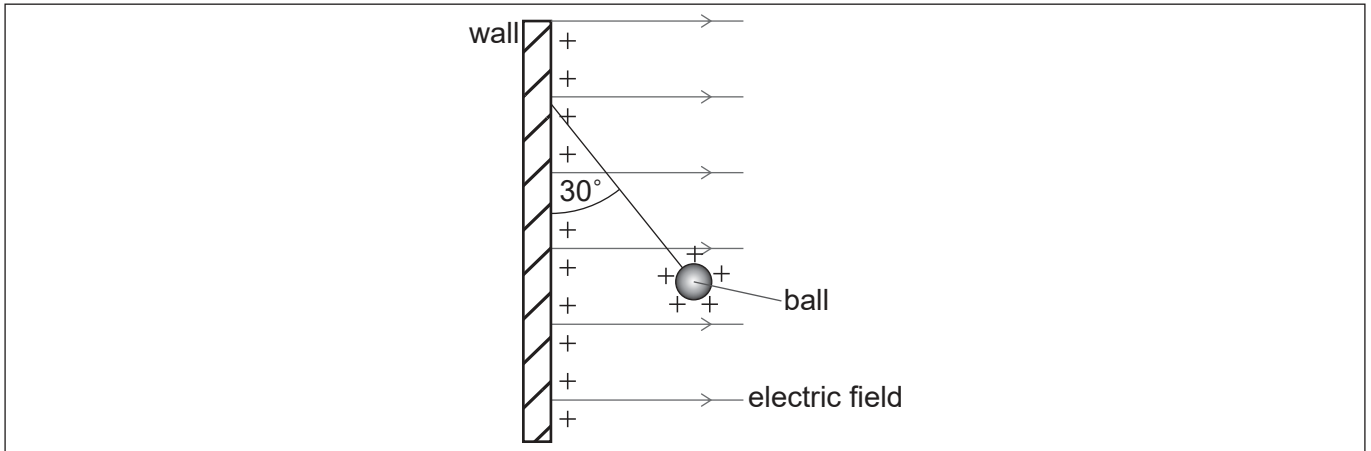
.....



28EP05

Turn over

3. A vertical wall carries a uniform positive charge on its surface. This produces a uniform horizontal electric field perpendicular to the wall. A small, positively-charged ball is suspended in equilibrium from the vertical wall by a thread of negligible mass.



- (a) The charge per unit area on the surface of the wall is  $\sigma$ . It can be shown that the electric field strength  $E$  due to the charge on the wall is given by the equation

$$E = \frac{\sigma}{2\epsilon_0}.$$

Demonstrate that the units of the quantities in this equation are consistent.

[2]

.....

.....

.....

.....

- (b) (i) The thread makes an angle of  $30^\circ$  with the vertical wall. The ball has a mass of 0.025 kg.

Determine the horizontal force that acts on the ball.

[3]

.....

.....

.....

.....

.....

(This question continues on the following page)



**(Question 3 continued)**

(ii) The charge on the ball is  $1.2 \times 10^{-6} \text{C}$ . Determine  $\sigma$ . [2]

.....

.....

.....

.....

(c) The thread breaks. Explain the initial subsequent motion of the ball. [3]

.....

.....

.....

.....

.....

.....

**(This question continues on page 9)**





Please **do not** write on this page.

Answers written on this page  
will not be marked.

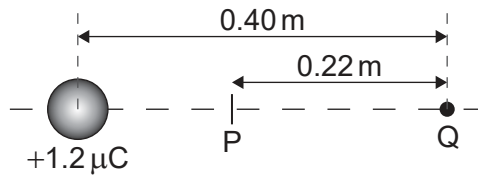


28EP08

**(Question 3 continued)**

- (d) The centre of the ball, still carrying a charge of  $1.2 \times 10^{-6} \text{ C}$ , is now placed 0.40 m from a point charge Q. The charge on the ball acts as a point charge at the centre of the ball.

P is the point on the line joining the charges where the electric field strength is zero. The distance PQ is 0.22 m.



- (i) Calculate the charge on Q. State your answer to an appropriate number of significant figures. [3]

.....

.....

.....

.....

.....

.....

- (ii) Outline, without calculation, whether or not the electric potential at P is zero. [2]

.....

.....

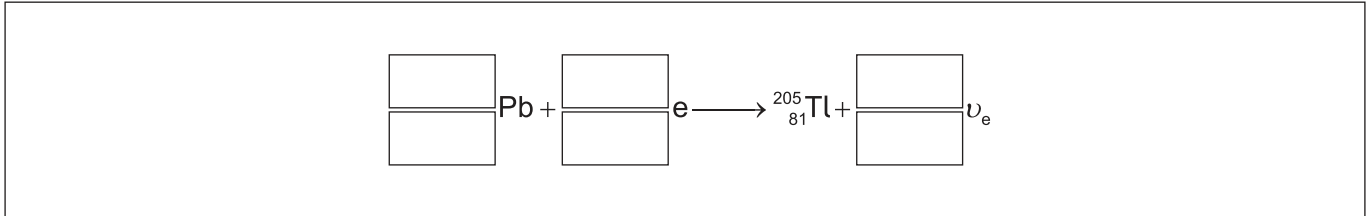
.....

.....



4. (a) During electron capture, an atomic electron is captured by a proton in the nucleus. The stable nuclide thallium-205 ( $^{205}_{81}\text{Tl}$ ) can be formed when an unstable lead (Pb) nuclide captures an electron.

(i) Write down the equation to represent this decay. [2]



(ii) The unstable lead nuclide has a half-life of  $15 \times 10^6$  years. A sample initially contains  $2.0 \mu\text{mol}$  of the lead nuclide. Calculate the number of thallium nuclei being formed each second  $30 \times 10^6$  years later. [3]

.....

.....

.....

.....

.....

.....

(b) The neutron number  $N$  and the proton number  $Z$  are not equal for the nuclide  $^{205}_{81}\text{Tl}$ . Explain, with reference to the forces acting within the nucleus, the reason for this. [2]

.....

.....

.....

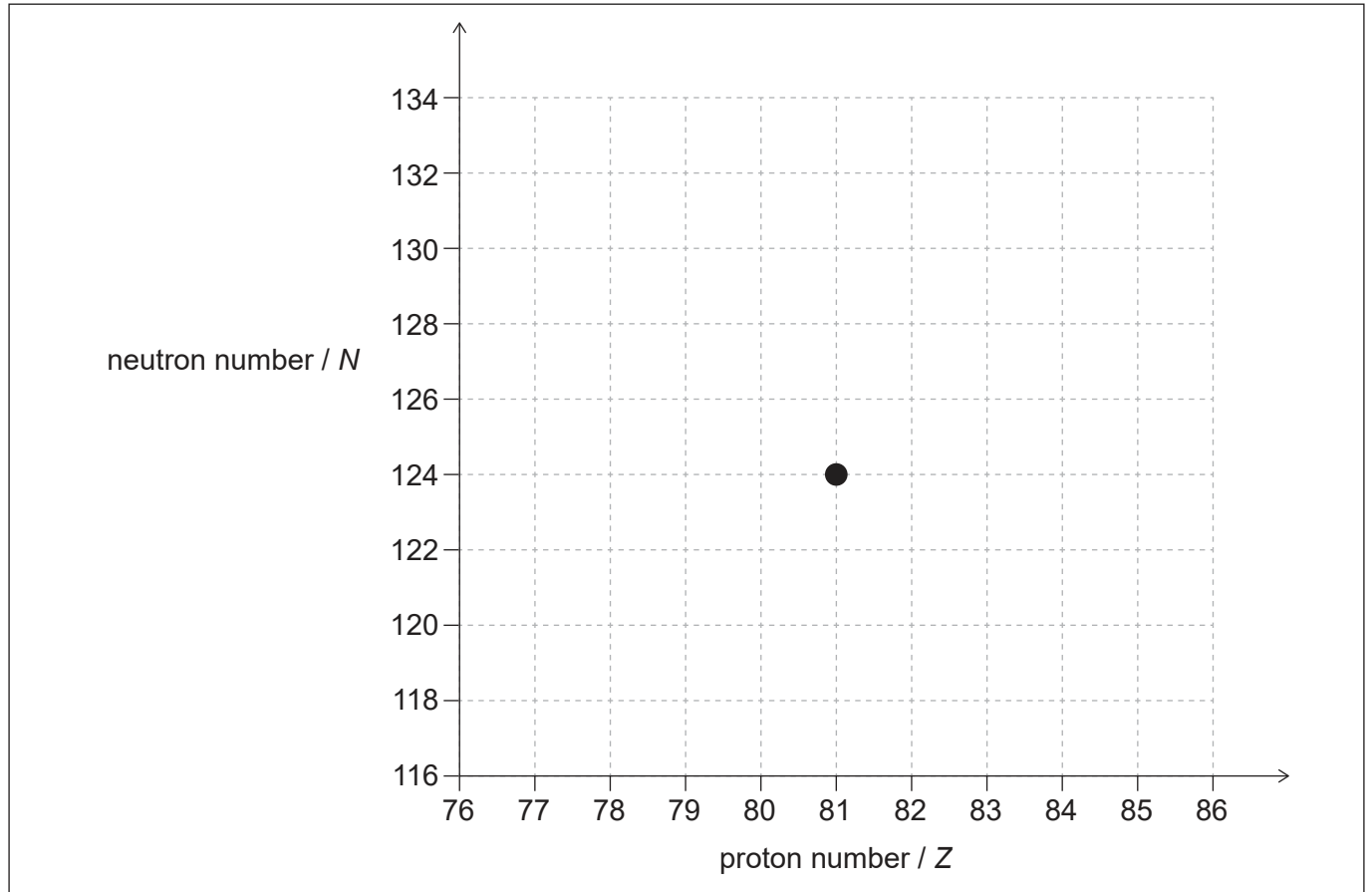
.....

(This question continues on the following page)



(Question 4 continued)

- (c) Thallium-205 ( $^{205}_{81}\text{Tl}$ ) can also form from successive alpha ( $\alpha$ ) and beta-minus ( $\beta^-$ ) decays of an unstable nuclide. The decays follow the sequence  $\alpha \beta^- \beta^- \alpha$ . The diagram shows the position of  $^{205}_{81}\text{Tl}$  on a chart of neutron number against proton number.



Draw **four** arrows to show the sequence of changes to  $N$  and  $Z$  that occur as the  $^{205}_{81}\text{Tl}$  forms from the unstable nuclide.

[3]



28EP11

Turn over

5. (a) Describe **two** ways in which standing waves differ from travelling waves. [2]

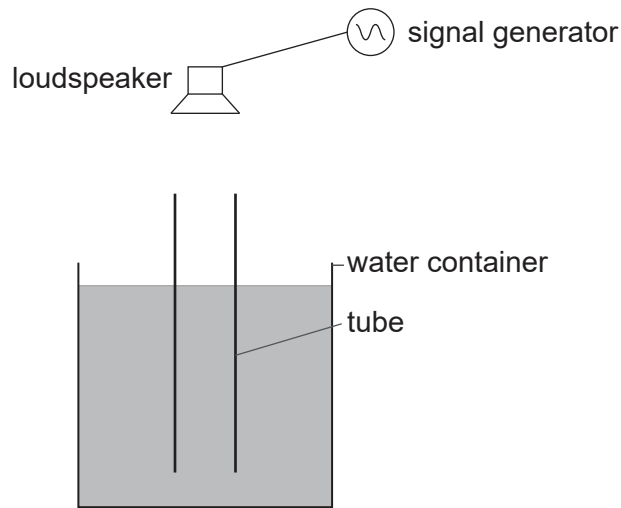
.....

.....

.....

.....

- (b) A vertical tube, open at both ends, is completely immersed in a container of water. A loudspeaker above the container connected to a signal generator emits sound. As the tube is raised the loudness of the sound heard reaches a maximum because a standing wave has formed in the tube.



- (i) Outline how a standing wave forms in the tube. [2]

.....

.....

.....

.....

(This question continues on the following page)

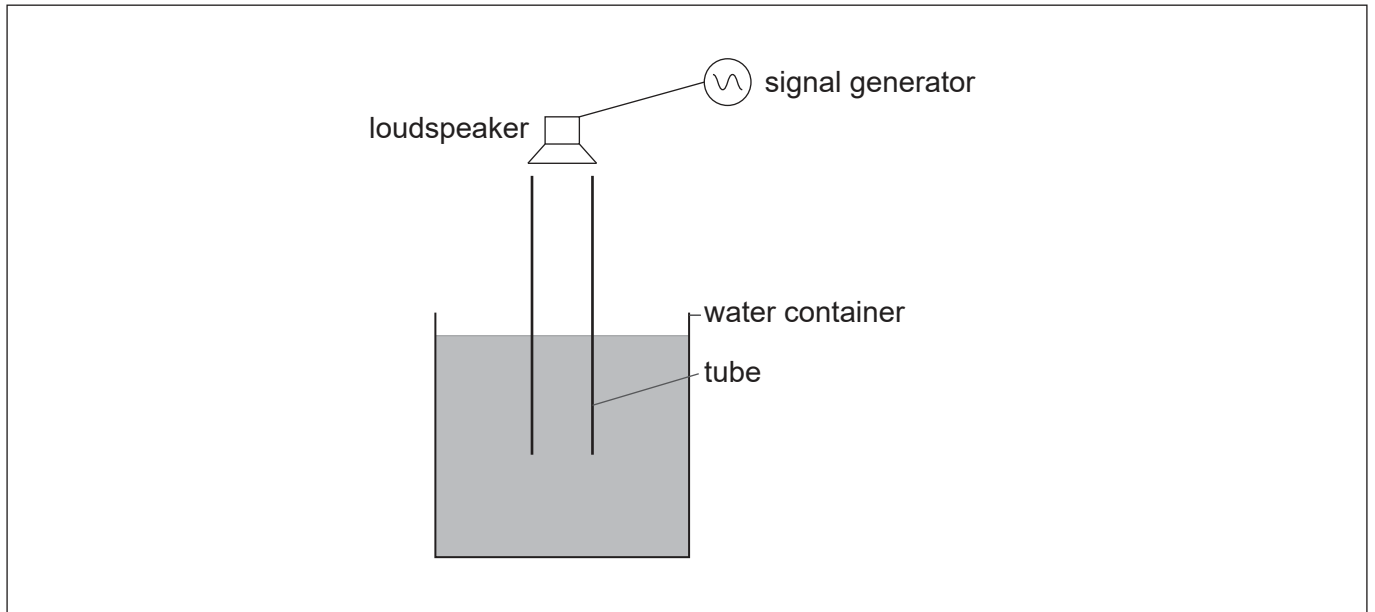


(Question 5 continued)

- (ii) The tube is raised until the loudness of the sound reaches a maximum for a **second time**.

Draw, on the following diagram, the position of the nodes in the tube when the second maximum is heard.

[1]



- (iii) Between the first and second positions of maximum loudness, the tube is raised through 0.37 m. The speed of sound in the air in the tube is  $320 \text{ ms}^{-1}$ . Determine the frequency of the sound emitted by the loudspeaker.

[2]

.....

.....

.....

.....



28EP13

Turn over

6. A photovoltaic cell is supplying energy to an external circuit. The photovoltaic cell can be modelled as a practical electrical cell with internal resistance.

The intensity of solar radiation incident on the photovoltaic cell at a particular time is at a maximum for the place where the cell is positioned.

The following data are available for this particular time:

Operating current = 0.90 A  
Output potential difference to external circuit = 14.5 V  
Output emf of photovoltaic cell = 21.0 V  
Area of panel = 350 mm × 450 mm

- (a) Explain why the output potential difference to the external circuit and the output emf of the photovoltaic cell are different. [2]

.....

.....

.....

.....

- (b) Calculate the internal resistance of the photovoltaic cell for the maximum intensity condition using the model for the cell. [3]

.....

.....

.....

.....

.....

.....

**(This question continues on the following page)**



**(Question 6 continued)**

- (c) The maximum intensity of sunlight incident on the photovoltaic cell at the place on the Earth's surface is  $680 \text{ W m}^{-2}$ .

A measure of the efficiency of a photovoltaic cell is the ratio

$$\frac{\text{energy available every second to the external circuit}}{\text{energy arriving every second at the photovoltaic cell surface}}$$

Determine the efficiency of this photovoltaic cell when the intensity incident upon it is at a maximum.

[3]

.....

.....

.....

.....

.....

.....

- (d) State **two** reasons why future energy demands will be increasingly reliant on sources such as photovoltaic cells.

[2]

Reason 1: .....

.....

Reason 2: .....

.....



28EP15

Turn over



7. (a) The primary coil of a transformer is connected to a 110V alternating current (ac) supply. The secondary coil of the transformer is connected to a 15V garden lighting system that consists of 8 lamps connected in parallel. Each lamp is rated at 35W when working at its normal brightness. Root mean square (rms) values are used throughout this question.

(i) The primary coil has 3300 turns. Calculate the number of turns on the secondary coil. [1]

.....  
.....

(ii) Determine the total resistance of the lamps when they are working normally. [2]

.....  
.....  
.....  
.....

(iii) Calculate the current in the primary of the transformer assuming that it is ideal. [2]

.....  
.....  
.....  
.....

(iv) Flux leakage is one reason why a transformer may not be ideal. Explain the effect of flux leakage on the transformer. [2]

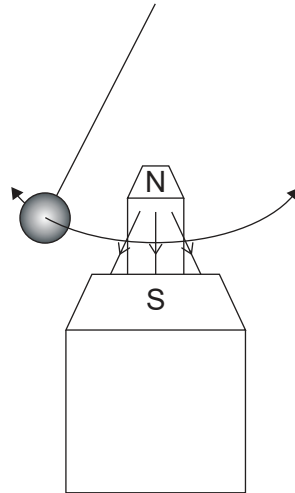
.....  
.....  
.....  
.....

(This question continues on the following page)



**(Question 7 continued)**

- (b) A pendulum with a metal bob comes to rest after 200 swings. The same pendulum, released from the same position, now swings at  $90^\circ$  to the direction of a strong magnetic field and comes to rest after 20 swings.



Explain why the pendulum comes to rest after a smaller number of swings.

[4]

.....

.....

.....

.....

.....

.....

.....

.....



28EP17

Turn over

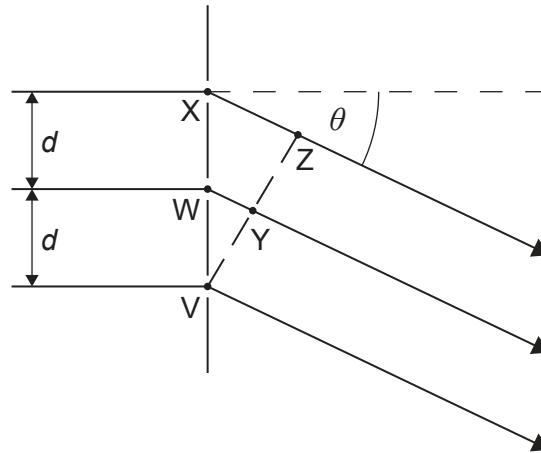
Please **do not** write on this page.

Answers written on this page  
will not be marked.



28EP18

8. (a) Monochromatic light of wavelength  $\lambda$  is normally incident on a diffraction grating. The diagram shows adjacent slits of the diffraction grating labelled V, W and X. Light waves are diffracted through an angle  $\theta$  to form a **second-order** diffraction maximum. Points Z and Y are labelled.



- (i) State the phase difference between the waves at V and Y. [1]

.....  
.....

- (ii) State, in terms of  $\lambda$ , the path length between points X and Z. [1]

.....  
.....

- (iii) The separation of adjacent slits is  $d$ . Show that for the second-order diffraction maximum  $2\lambda = d \sin \theta$ . [1]

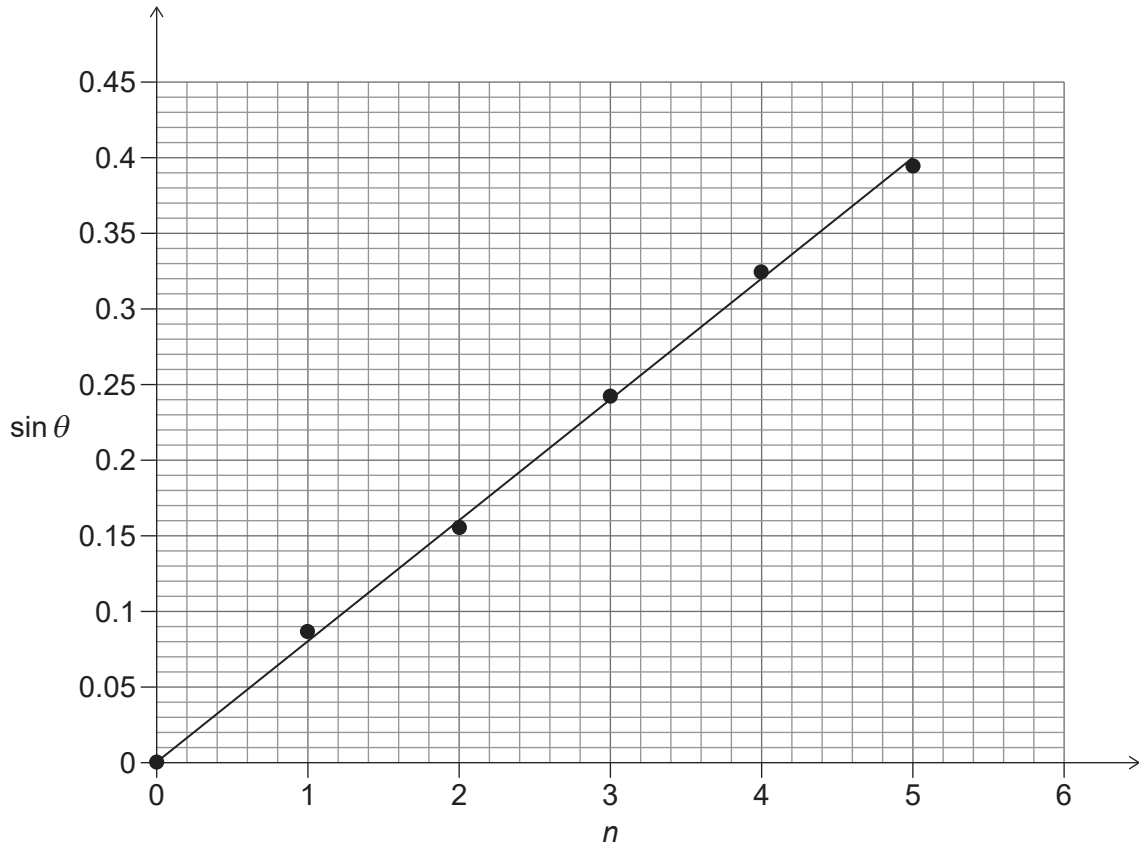
.....  
.....

(This question continues on the following page)



**(Question 8 continued)**

- (b) Monochromatic light of wavelength 633 nm is normally incident on a diffraction grating. The diffraction maxima incident on a screen are detected and their angle  $\theta$  to the central beam is determined. The graph shows the variation of  $\sin \theta$  with the order  $n$  of the maximum. The central order corresponds to  $n = 0$ .



Determine a mean value for the number of slits per millimetre of the grating.

[4]

.....

.....

.....

.....

.....

.....

.....

.....

(This question continues on the following page)



28EP20

**(Question 8 continued)**

(c) State the effect on the graph of the variation of  $\sin \theta$  with  $n$  of:

(i) using a light source with a smaller wavelength. [1]

.....  
.....

(ii) increasing the distance between the diffraction grating and the screen. [1]

.....  
.....



28EP21

Turn over

9. (a) In an experiment to demonstrate the photoelectric effect, monochromatic electromagnetic radiation from source A is incident on the surfaces of metal P and metal Q. Observations of the emission of electrons from P and Q are made.

The experiment is then repeated with two other sources of electromagnetic radiation: B and C. The table gives the results for the experiment and the wavelengths of the radiation sources.

Radiation source	Wavelength / $10^{-7}$ m	Metal P	Metal Q
A	3.0	electrons emitted	electrons emitted
B	6.0	electrons emitted	no electrons emitted
C	8.0	no electrons emitted	no electrons emitted

Outline

- (i) the cause of the electron emission for radiation A; [1]

.....  
.....

- (ii) why electrons are never emitted for radiation C; [1]

.....  
.....

- (iii) why radiation B gives different results. [1]

.....  
.....

- (b) Explain why there is no effect on the table of results when the intensity of source B is doubled. [1]

.....  
.....

(This question continues on the following page)



28EP22

**(Question 9 continued)**

- (c) Photons with energy  $1.1 \times 10^{-18} \text{ J}$  are incident on a third metal surface. The maximum energy of electrons emitted from the surface of the metal is  $5.1 \times 10^{-19} \text{ J}$ .

Calculate, in eV, the work function of the metal.

[2]

.....

.....

.....

.....



28EP23

Turn over



10. The table gives data for Jupiter and three of its moons, including the radius  $r$  of each object.

Object	Mass/kg	$r / m$	Orbital radius around Jupiter/m
Jupiter	$1.9 \times 10^{27}$	$7.1 \times 10^7$	
Io	$8.9 \times 10^{22}$	$1.8 \times 10^6$	$4.9 \times 10^8$
Ganymede	$1.5 \times 10^{23}$	$2.6 \times 10^6$	$1.06 \times 10^9$
Callisto	$1.1 \times 10^{23}$	$2.4 \times 10^6$	$1.88 \times 10^9$

(a) Calculate, for the surface of Io, the gravitational field strength  $g_{Io}$  due to the mass of Io. State an appropriate unit for your answer. [2]

.....

.....

.....

.....

(b) A spacecraft is to be sent from Io to infinity.

(i) Show that the  $\frac{\text{gravitational potential due to Jupiter at the orbit of Io}}{\text{gravitational potential due to Io at the surface of Io}}$  is about 80. [2]

.....

.....

.....

.....

(ii) Outline, using (b)(i), why it is not correct to use the equation  $\sqrt{\frac{2G \times \text{mass of Io}}{\text{radius of Io}}}$  to calculate the speed required for the spacecraft to reach infinity from the surface of Io. [1]

.....

.....

(This question continues on the following page)



**(Question 10 continued)**

- (c) An engineer needs to move a space probe of mass 3600 kg from Ganymede to Callisto. Calculate the energy required to move the probe from the orbital radius of Ganymede to the orbital radius of Callisto. Ignore the mass of the moons in your calculation. [2]

.....

.....

.....

.....

**References:**

© International Baccalaureate Organization 2021



28EP25

Please **do not** write on this page.

Answers written on this page  
will not be marked.



28EP26

Please **do not** write on this page.

Answers written on this page  
will not be marked.



28EP27

Please **do not** write on this page.

Answers written on this page  
will not be marked.



28EP28